










RESOLVA AS ADIÇÕES.

 <p>$3 + 3 = \underline{\quad}$</p>	 <p>$2 + 4 = \underline{\quad}$</p>	 <p>$2 + 3 = \underline{\quad}$</p>
 <p>$5 + 1 = \underline{\quad}$</p>	 <p>$2 + 6 = \underline{\quad}$</p>	 <p>$2 + 2 = \underline{\quad}$</p>
 <p>$3 + 5 = \underline{\quad}$</p>	 <p>$7 + 2 = \underline{\quad}$</p>	 <p>$1 + 2 = \underline{\quad}$</p>

NOME: _____

DATA: **24/11/2021**

JARDIM II - Prof.ª _____